

V.S.T
HALF-YEARLY EXAMINATION

Class –III

F.M. – 60

Sub : Mathematics

Time:-2 hrs

Question – Cum – Answer

NAME _____
SEC - _____ ROLL NO. - _____ DATE - _____
MARKS _____ GRADE _____
<i>Sign of Invigilation</i> _____ <i>Sign of Examiner</i> _____

A. Fill in the blanks: (1x10 =10)

- (i) $215 \times \underline{\hspace{2cm}} = 0$
- (ii) $12 \times \underline{\hspace{2cm}} = 44 \times \underline{\hspace{2cm}}$
- (iii) $9 \div \underline{\hspace{2cm}} = 1$
- (iv) $444 - 0 = \underline{\hspace{2cm}}$
- (v) $20 - 13 = 10 - \underline{\hspace{2cm}}$
- (vi) Predecessor of 1000 is $\underline{\hspace{2cm}}$
- (vii) Successor of 249 is $\underline{\hspace{2cm}}$
- (viii) A cone has $\underline{\hspace{2cm}}$ faces.
- (ix) A sphere has $\underline{\hspace{2cm}}$ corners.
- (x) $5000 + 30 + 0 + 9 = \underline{\hspace{2cm}}$

B. Do as directed:- (2X10=20)

i) Add it .

$$\begin{array}{r} 1\ 3\ 8\ 1 \\ 3\ 4\ 2\ 9 \\ +\ 7\ 7\ 2 \\ \hline \end{array}$$

ii) Add it

$$\begin{array}{r} 2\ 2\ 2\ 0 \\ +\ 2\ 7\ 2\ 4 \\ \hline \end{array}$$

ii) Subtract.

$$\begin{array}{r} 8900 \\ - 4765 \\ \hline \end{array}$$

iv) Multiply .

$$\begin{array}{r} 35 \\ \times 36 \\ \hline \end{array}$$

v) Multiply .

$$\begin{array}{r} 174 \\ \times 3 \\ \hline \end{array}$$

vi) Divide using Repeated Subtraction.

27 by 9

vii) Divide using Long division method.

81 by 9

viii) Write in expanded form in 2 ways.

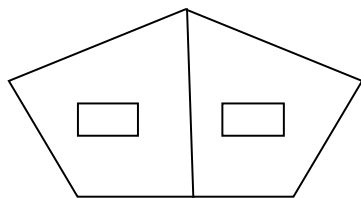
5008

(a)

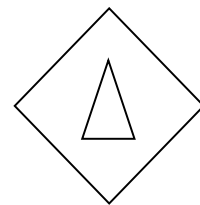
(b)

ix) How many line segments are there in the following figures ?

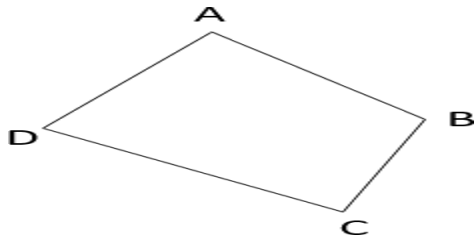
(a)



(b)



x) Name all the line segments ?



C. Solve the followings :-

(3X6=18)

i) Divide Using Long division method and find Quotient and Remainder.

643 by 5

ii) There are 35 balloons in one packet. How many balloons are there in 25 such packets ?

iii) Give one example of each of the following.

(i) Point -

(ii) Line segment -

(iii) Ray -

iv) Draw a line segment of 7 cm and name it.

v) Multiply 275×29

vi) Find out the number of digits present in the predecessor of the smallest 4 digit number.

A. Solve the following word problems :-

(4 X3=12)

i) A poultry farm had 4721 hens, if 2917 hens were sold out, how many hens were left in the poultry farm ?

ii) Rahul can type 32 pages in 8 hours. How many pages can be typed in one hour ?

iii) Trees play a very important role in our life. They beautify our surroundings. They make air fresh and cool. On the Vanmahotsav Day, each child of Class- II and Class – III was asked to bring a sapling in a pot. Class – II and Class – III brought 398 sapling and 550 saplings respectively.

a) Which class brought more saplings and how much more ?

b) How do you celebrate the Vanmahotsav Day in your school ?
